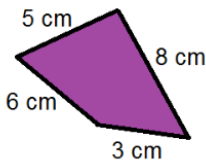
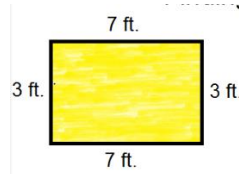
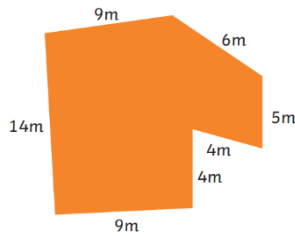


Year 4 Homework
Due: 12th March 2025

Maths

Calculate the perimeter of these shapes. They are not drawn to scale:



English

Write five descriptive sentences about a setting. Use at least one adverb in each to describe the time, place or cause.

Example:

Several waltzers spun rapidly.

Examples of adverbs:

Frequently In
Mysteriously Outside
Rarely Behind

Oracy Focus

Our word of the week is

Prayer

Why do we focus on prayer during Lent?

Times Tables

By the end of Year 4, you should aim to know all of your times tables up to 12×12 .

6×7

8×12

3×9

10×3

9×3

7×2

11×8

12×12

8×4

3×3

Please remember to access TT Rock Stars too!

Spellings

You will be tested on spellings which follow the same patterns as the ones below.

However, the spellings that I test you on may include words which are different to the ones below:

These words end in -y but change to -i before the suffix.

Various

Envious

Furious

Glorious

Mysterious

Serious

Obvious

Curious

Gracious

Spacious

Please be reminded that Year 4's only PE day is Thursday. Children need to bring their swimming kits on this day.