




Times Table Hunt: 2x, 3x, 5x and 10x Table


Detective Dog is on the hunt for some missing numbers from the 2x, 3x, 5x and 10x tables. Can you help him find them?


1. $2 \times 3 =$ 

3. $16 = 8 \times$ 

8. $8 \times$  $= 80$


2. $7 \times$  $= 35$


4. $4 \times 5 =$ 

9.  $= 7 \times 5$

5. $3 \times 10 =$ 

10. $36 =$  $\times 3$

6.  $= 11 \times 5$

11.  $\times 2 = 18$

7. $7 \times 3 =$ 

12. $0 \times 5 =$ 